



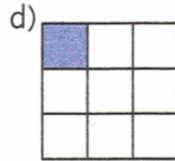
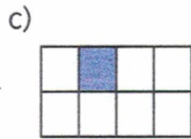
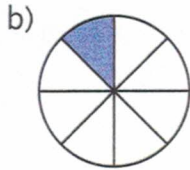
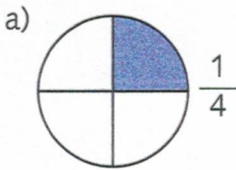


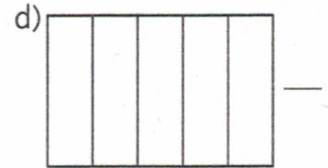
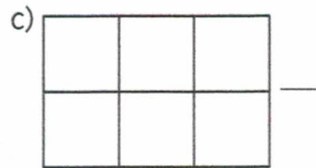

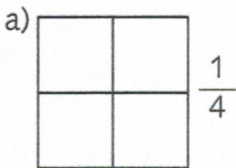
1. Wo wurde in gleich große Teile (gerecht) geteilt?
Kreuze an.



2. Wie heißt der Bruch?



3. Färbe immer ein Feld. Gib den Bruchteil an.



4. Zeichne und färbe den angegebenen Bruchteil.

a) $\frac{1}{4}$	b) $\frac{1}{8}$	c) $\frac{1}{3}$	d) $\frac{1}{5}$
e) $\frac{1}{2}$	f) $\frac{1}{9}$	g) $\frac{1}{7}$	h) $\frac{1}{4}$